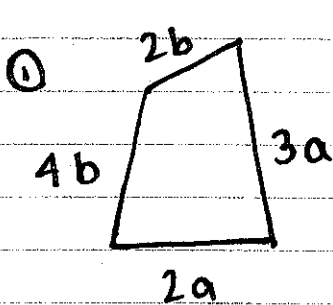
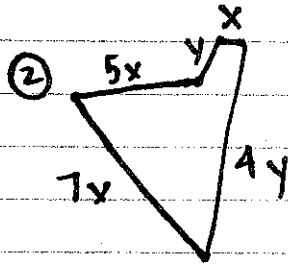


⊗ Write an expression to describe the perimeter of each shape. Then, evaluate using the given value for each variable. Use another sheet for work.



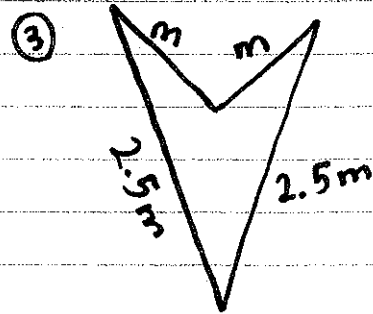
$$a = 1.9 \text{ m}$$

$$b = 0.6 \text{ m}$$

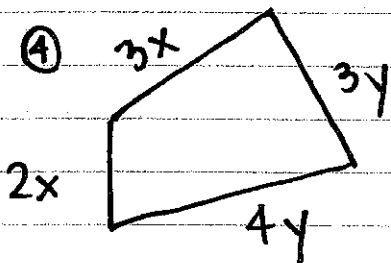


$$x = 0.7 \text{ in}$$

$$y = 1.1 \text{ in}$$

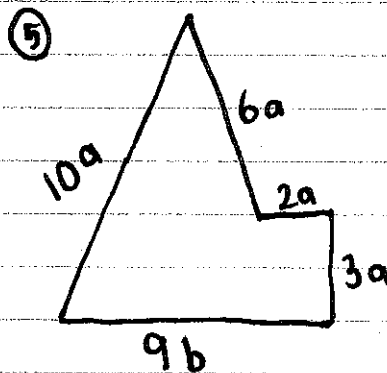


$$m = 6 \text{ cm}$$



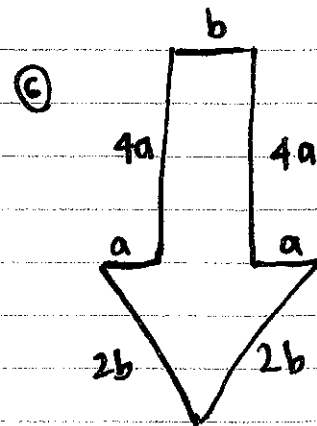
$$x = 3.7 \text{ mm}$$

$$y = 4 \text{ mm}$$



$$a = 6 \text{ ft}$$

$$b = 6.1 \text{ ft}$$



$$a = 3.5 \text{ mm}$$

$$b = 4.5 \text{ mm}$$