

Name: _____

Date: _____
Mrs. van der Vossen Math 8

A3 - Hundred Grids

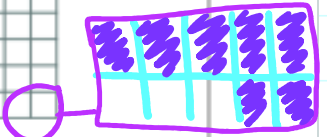
43% $40+3$ 	78% $70+8$
132% 100 	$30+2$
$12\frac{3}{4}\%$ $10+2$ 	

$12\frac{3}{4}\%$
 ↓
 Whole #
 Regular "grid"

#color
 # parts

make another grid

no whole
 only draw part
 0.7%
 $\frac{7}{10}\%$



$40 \div 2 = 20$ | $\frac{4}{4} = \frac{8}{8} = \frac{80}{80}$


Name: _____

Which is $\frac{4}{5}\%$?




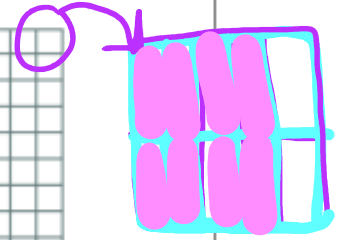
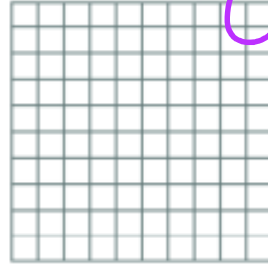
Date: _____

$$\frac{4}{5} = \frac{8}{10} = \frac{80}{100}$$


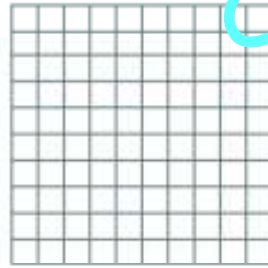
(a)



(b)



$$\frac{1}{2}\%$$



$$\frac{3}{6}\%$$

